

Alg 1 Week 5 Block

Warm Up

1. Skill 12: Simply Exponential Expressions. Simplify, leaving no negative exponents. Show all steps.

$$\frac{7x^{-5}(x^4)^2 \cdot x^0}{(14x^5)^2}$$

2. Skill 13: Multiplying Polynomials: Use a rectangle to multiply and solve the following problem.

$$(5x^3 + 9x^2 - 3)(11x - 1)$$

3. Skill 14: Factor a trinomial

$$10x^2 + 85x + 105$$

4. Factor each expression.

a.) $18h^3 + 45h^2 - 8h - 20$

b.) $36v^3 - 126v^2 + 48v - 168$

-
5. Put into standard form, then name the polynomial based on its degree and number of terms.

a. $15 - x$

b. $5b^3 + x^2$

Notes 9-1 Quadratic Graphs and Their Properties

Take note

Key Concept Standard Form of a Quadratic Function

A **quadratic function** is a function that can be written in the form $y = ax^2 + bx + c$, where $a \neq 0$. This form is called the **standard form of a quadratic function**.

Examples $y = 3x^2$ $y = x^2 + 9$ $y = x^2 - x - 2$

The highest or lowest point of a parabola is its **vertex**, which is on the axis of symmetry.

If $a > 0$ in $y = ax^2 + bx + c$, the parabola opens upward.



The vertex is the **minimum** point, or lowest point, of the parabola.

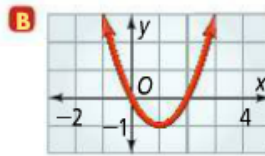
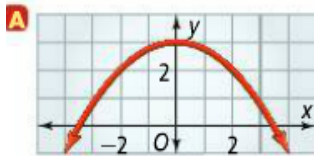
If $a < 0$ in $y = ax^2 + bx + c$, the parabola opens downward.



The vertex is the **maximum** point, or highest point, of the parabola.

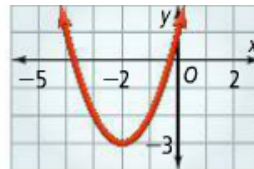
Problem 1 Identifying a Vertex

What are the coordinates of the vertex of each graph? Is it a minimum or a maximum?



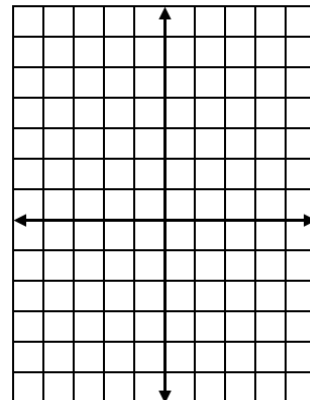
Now you try:

What is the vertex of the graph at the right? Is it a minimum or a maximum?



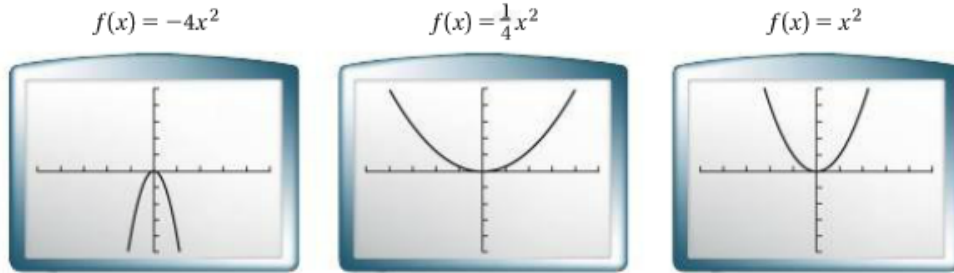
Problem 2 Graphing $y = ax^2$

Graph the function $y = x^2$. Make a table of values. What are the domain and range?



Problem 3 Comparing Widths of Parabolas

Use the graphs below. What is the order, from widest to narrowest, of the graphs of the quadratic functions $f(x) = -4x^2$, $f(x) = \frac{1}{4}x^2$, and $f(x) = x^2$?



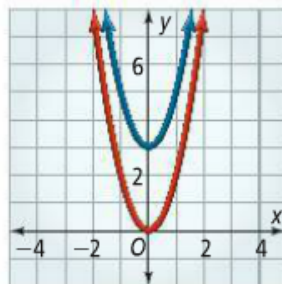
Got It? 3. What is the order, from widest to narrowest, of the graphs of the functions $f(x) = -x^2$, $f(x) = 3x^2$, and $f(x) = -\frac{1}{3}x^2$?

Problem 4 Graphing $y = ax^2 + c$

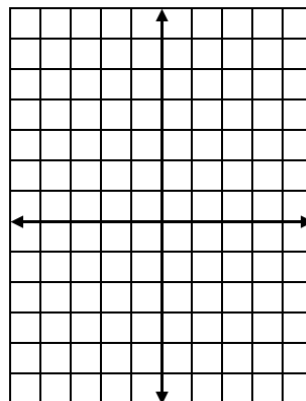
Multiple Choice How is the graph of $y = 2x^2 + 3$ different from the graph of $y = 2x^2$?

- A It is shifted 3 units up.
- B It is shifted 3 units down.
- C It is shifted 3 units to the right.
- D It is shifted 3 units to the left.

x	$y = 2x^2$	$y = 2x^2 + 3$
-2	8	11
-1	2	5
0	0	3
1	2	5
2	8	11



Got It? 4. Graph $y = x^2$ and $y = x^2 - 3$. How are the graphs related?



HW: page 550

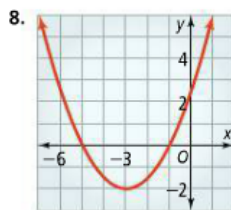
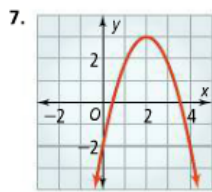
HW p 550: 7, 8, 9, 16-19, 34-36

Identify the vertex of each parabola. Tell whether it is a minimum or a maximum.

See Problem 1.

p 536: 12, 14, 22, 24

p 537: 36, 42, 44, 50, 54



9.

x	y
0	8
1	2
2	0
3	2
4	8

Order each group of quadratic functions from widest to narrowest graph.

See Problem 3.

16. $y = 3x^2, y = 2x^2, y = 4x^2$

17. $f(x) = 5x^2, f(x) = -3x^2, f(x) = x^2$

18. $y = -\frac{1}{2}x^2, y = 5x^2, y = -\frac{1}{4}x^2$

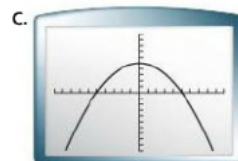
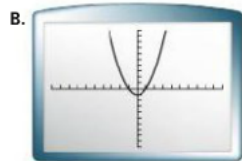
19. $f(x) = -2x^2, f(x) = -\frac{2}{3}x^2, f(x) = -4x^2$

Match each function with its graph.

34. $f(x) = x^2 - 1$

35. $f(x) = -3x^2 + 8$

36. $f(x) = -0.2x^2 + 5$



Page 536-537

Simplify. Write each answer in standard form.

12. $(2v^3 - v + 8) + (-v^3 + v - 3)$

14. $(4h^3 + 3h + 1) - (-5h^3 + 6h - 2)$

Simplify each product. Write in standard form.

36. $(6c + 5)^2$

Find the GCF of the terms of each polynomial. Then factor the polynomial.

22. $12p^4 + 16p^3 + 8p$

24. $45c^5 - 63c^3 + 27c$

Factor each expression.

42. $g^2 - 5g - 14$

44. $6k^2 - 10k\ell + 4\ell^2$



50. $3x^2 + 3x - 6$

54. $-2h^2 + 4h + 70$

Time for Week 5 assessments

Skill test

Ch 8 Quiz #1

PT wk 5